


Instructions (shown before students start the test)

Here are some sample questions similar to what you will find on the actual test. Fill-in answers must be spelled correctly in order to get points for the answer. Don't worry if you do not get to all of the questions, just do your best.


Introduction (shown after students start the test)

Welcome! Good luck!


1. (1.00 pts) Give the common name of the species you hear in the link below. (Spelling must be correct to get credit.)




2. (1.00 pts) Give the common name of the species you hear in the link below. (Spelling must be correct to get credit.)



3. (1.00 pts) Give the **common name** for the species shown in **picture A**. (Spelling must be correct to get credit.)



4. (1.00 pts) Which of these habitats below best describe where the species shown in **picture A** breeds?



- A) Suburban yards
- B) Tundra
- C) Shorelines
- D) Prairie grasslands
- E) Marshes
- F) Riparian forest


5. (1.00 pts) Are the newborn babies for the species shown in **picture A**, altricial or precocial?



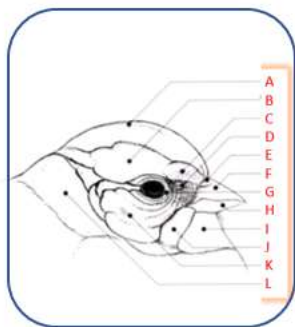
- A) Altricial

B) Precocial


6. (1.00 pts) Give the **common name** for the species shown in **picture B**. (Spelling must be correct to get credit.)



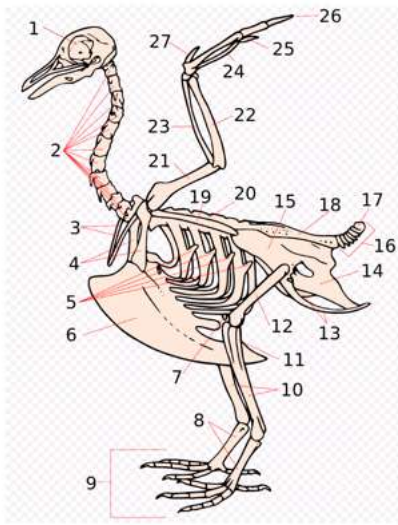
7. (1.00 pts) Which **letter** shows where the malar is located?




8. (1.00 pts) Give the **scientific name** for the species shown in **picture C**. (Spelling must be correct to get credit.)



9. (1.00 pts) Which **number** indicates the femur?



10. (1.00 pts) Give the **common name** for the species shown in **picture D**. (Spelling must be correct to get credit.)




11. (1.00 pts) Select all that are **TRUE** for the species in **picture D**.




(Mark **ALL** correct answers)

- A) Common year round resident
- B) Common resident in summer, but migrates south in the winter
- C) Found in suburban areas and will use bird feeders
- D) Range is widespread, found both east and west of the Mississippi.
- E) Nests together in a colony
- F) Nests in cavities, but doesn't make cavities

12. (1.00 pts) Give the **common name** for the species shown in **picture E**. (Spelling must be correct to get credit.)



13. (1.00 pts) Which of these are **TRUE** for the species in **picture E**?



(Mark **ALL** correct answers)

- A) Migrates at night.
- B) Found on fresh water
- C) Just like in ducks, has webbed toes.
- D) Not like in ducks, has lobed toes instead.
- E) Nests on land near water

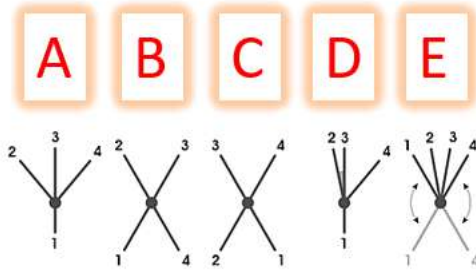
14. (1.00 pts) Palmations (Palmate, Totipalmate and Semipalmate) are characteristics of which of these families?

(Mark **ALL** correct answers)

- A) Anatidae
- B) Pandionidae


- C) Alcedinidae
- D) Gaviidae
- E) Pelecanidae
- F) Fringillidae

15. (1.00 pts) Give the **letter** of the correct diagram depicting the Zygodactyl toe arrangement.




- A) A
- B) B
- C) C
- D) D
- E) E

16. (1.00 pts) Give the **common name** for the species shown in **picture F**. (Spelling must be correct to get credit.)



17. (1.00 pts) Select the best answer that describes the size of the species in **picture F**?



- A) Size is smaller than a Mallard.
 B) Size is about the same as a Mallard
 C) size is larger than a Mallard.

18. (1.00 pts) Are the newborn babies for the species shown in picture F, altricial or precocial?



- A) Altricial
 B) Precocial


19. (1.00 pts) Help birds by keeping cats indoors. About how many birds are killed by cats in the US and Canada each year?

- A) 400,000 birds
 B) 750,000 birds
 C) 1.6 million birds
 D) 2.4 billion birds
 E) 4.6 billion birds
 F)

20. (1.00 pts) True or False? The follicles of the contour feathers are concentrated in dense tracts called pterylae and are separated by bare areas called apteria.

- True False


21. (1.00 pts) Give the letter of the feather that is a Semiplume type.




22. (1.00 pts) **True or False?** According to the Migratory Birds Treaty Act, it is illegal to own native bird feathers even if you found them in your yard.

True False

23. (1.00 pts) Give the **common name** for the species shown in **picture A**. (Spelling must be correct to get credit.)




24. (1.00 pts) What is the conservation concern for the species shown in **picture A**?




- A) Low Concern
- B) Declining
- C) Common Bird in Steep Decline
- D) Restricted Range
- E) Red Watch List

25. (1.00 pts) Give the **common name** for the species shown in **picture B**. (Spelling must be correct to get credit.)




26. (1.00 pts) **True or False?** The species in **picture B** is one of the most intensively studied of all birds.




True False

27. (1.00 pts) Give the **common name** for the species shown in **picture C**. (Spelling must be correct to get credit.)



28. (1.00 pts) Which of these are **TRUE** for the species in **picture C**?



(Mark ALL correct answers)

- A) Can outrace a human
- B) Can outrace a coyote
- C) Will kill and eat rattlesnakes
- D) Nest on the ground, usually under a shrub or cactus
- E) Both male and female look the same
- F) Lays 2-6 eggs

29. (1.00 pts) What is the toe arrangement for the species shown in **picture C**?




- A) Anisodactyl
- B) Zygodactyl
- C) Heterodactyl
- D) Synadactyl
- E) Pamprodactyl

30. (1.00 pts) Give the **common name** for the species shown in **picture D**. (Spelling must be correct to get credit.)




31. (1.00 pts) **Select the best answer.** The species shown in **picture D** can be active day, night and at twilight. What is it called when a species is active at twilight?



- A) Diurnal
- B) Nocturnal
- C) Matutinal
- D) Crepuscular
- E) Vespertine
- F)


32. (1.00 pts) Give the **common name** for the species shown in **picture E**. (Spelling must be correct to get credit.)




33. (1.00 pts) All birds are warm-blooded, even the species found in the Arctic.

- True
- False

34. (1.00 pts) Give the **common name** for the species shown in **picture F**. (Spelling must be correct to get credit.)




35. (1.00 pts) When the species shown in **picture F** is in a dive (technique called stooping), how fast can it go?



(Mark **ALL** correct answers)

- A) 50mph
- B) 80mph
- C) 180mph
- D) 240mph
- E) 300mph


36. (1.00 pts) Give the **common name** for the species shown in **picture A**. (Spelling must be correct to get credit.)




37. (1.00 pts) One of the defining characteristics of the class Aves is that they all can fly.

True False


38. (1.00 pts) Give the **common name** for the species shown in **picture B**. (Spelling must be correct to get credit.)



39. (1.00 pts) Give the **common name** for the species shown in **picture E**. (Spelling must be correct to get credit.)



40. (1.00 pts) What is the wing span of the species shown in **picture E**?



A) 20"
 B) 36"

- C) 42"
- D) 58"
- E) 60"
- F) 78"

41. (1.00 pts) Give the **common name** for the species shown in **picture A**. (Spelling must be correct to get credit.)




Great Job!

Thanks.


Welcome! Good luck!

1. (1.00 pts) Give the common name of the species you hear in the link below. (Spelling must be correct to get credit.)




Northern Cardinal

2. (1.00 pts) Give the common name of the species you hear in the link below. (Spelling must be correct to get credit.)



Mourning Dove

3. (1.00 pts) Give the **common name** for the species shown in **picture A**. (Spelling must be correct to get credit.)



Lapland Longspur

4. (1.00 pts) Which of these habitats below best describe where the species shown in **picture A** breeds?



- A) Suburban yards
- B) Tundra
- C) Shorelines
- D) Prairie grasslands
- E) Marshes
- F) Riparian forest


5. (1.00 pts) Are the newborn babies for the species shown in **picture A**, altricial or precocial?



- A) Altricial

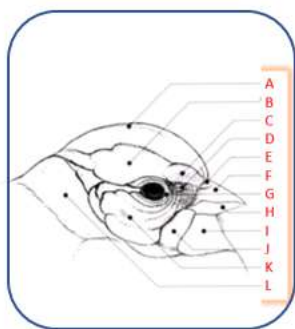
B) Precocial

6. (1.00 pts) Give the **common name** for the species shown in **picture B**. (Spelling must be correct to get credit.)




Cedar Waxwing

7. (1.00 pts) Which **letter** shows where the malar is located?



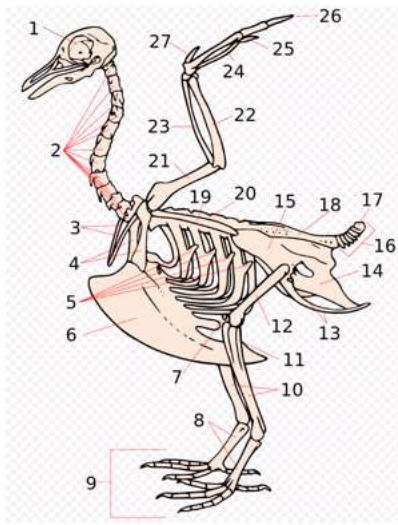
J

8. (1.00 pts) Give the **scientific name** for the species shown in **picture C**. (Spelling must be correct to get credit.)



Turdus migratorius

9. (1.00 pts) Which **number** indicates the femur?



12

10. (1.00 pts) Give the **common name** for the species shown in **picture D**. (Spelling must be correct to get credit.)



Tufted Titmouse


11. (1.00 pts) Select all that are **TRUE** for the species in **picture D**.



(Mark **ALL** correct answers)


- A) Common year round resident
- B) Common resident in summer, but migrates south in the winter
- C) Found in suburban areas and will use bird feeders
- D) Range is widespread, found both east and west of the Mississippi.
- E) Nests together in a colony
- F) Nests in cavities, but doesn't make cavities

12. (1.00 pts) Give the **common name** for the species shown in **picture E**. (Spelling must be correct to get credit.)



Pied-billed Grebe

13. (1.00 pts) Which of these are **TRUE** for the species in **picture E**?



(Mark **ALL** correct answers)

- A) Migrates at night.
- B) Found on fresh water
- C) Just like in ducks, has webbed toes.
- D) Not like in ducks, has lobed toes instead.
- E) Nests on land near water

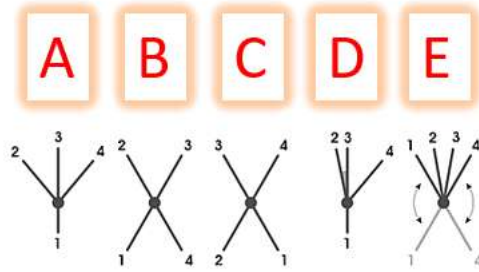
14. (1.00 pts) Palmations (Palmate, Totipalmate and Semipalmate) are characteristics of which of these families?

(Mark **ALL** correct answers)

- A) Anatidae
- B) Pandionidae

- C) Alcedinidae
- D) Gaviidae
- E) Pelecanidae
- F) Fringillidae

15. (1.00 pts) Give the **letter** of the correct diagram depicting the Zygodactyl toe arrangement.




- A) A
- B) B
- C) C
- D) D
- E) E

16. (1.00 pts) Give the **common name** for the species shown in **picture F**. (Spelling must be correct to get credit.)



Green-winged Teal

17. (1.00 pts) Select the best answer that describes the size of the species in **picture F**?



- A) Size is smaller than a Mallard.
- B) Size is about the same as a Mallard
- C) size is larger than a Mallard.

18. (1.00 pts) Are the newborn babies for the species shown in picture F, altricial or precocial?



- A) Altricial
- B) Precocial


19. (1.00 pts) Help birds by keeping cats indoors. About how many birds are killed by cats in the US and Canada each year?

- A) 400,000 birds
- B) 750,000 birds
- C) 1.6 million birds
- D) 2.4 billion birds
- E) 4.6 billion birds
- F)

20. (1.00 pts) True or False? The follicles of the contour feathers are concentrated in dense tracts called pterylae and are separated by bare areas called apteria.

- True
- False

21. (1.00 pts) Give the letter of the feather that is a Semiplume type.




F

22. (1.00 pts) **True or False?** According to the Migratory Birds Treaty Act, it is illegal to own native bird feathers even if you found them in your yard.


True False

23. (1.00 pts) Give the **common name** for the species shown in **picture A**. (Spelling must be correct to get credit.)



Great Blue Heron

24. (1.00 pts) What is the conservation concern for the species shown in **picture A**?




- A) Low Concern
- B) Declining
- C) Common Bird in Steep Decline
- D) Restricted Range
- E) Red Watch List

25. (1.00 pts) Give the **common name** for the species shown in **picture B**. (Spelling must be correct to get credit.)




B

26. (1.00 pts) **True or False?** The species in **picture B** is one of the most intensively studied of all birds.




True False

27. (1.00 pts) Give the **common name** for the species shown in **picture C**. (Spelling must be correct to get credit.)



Greater Roadrunner


28. (1.00 pts) Which of these are **TRUE** for the species in **picture C**?



(Mark ALL correct answers)

- A) Can outrace a human
- B) Can outrace a coyote
- C) Will kill and eat rattlesnakes
- D) Nest on the ground, usually under a shrub or cactus
- E) Both male and female look the same
- F) Lays 2-6 eggs

29. (1.00 pts) What is the toe arrangement for the species shown in **picture C**?




- A) Anisodactyl
- B) Zygodactyl
- C) Heterodactyl
- D) Synadactyl
- E) Pamprodactyl

30. (1.00 pts) Give the **common name** for the species shown in **picture D**. (Spelling must be correct to get credit.)




Black Skimmer

31. (1.00 pts) **Select the best answer.** The species shown in **picture D** can be active day, night and at twilight. What is it called when a species is active at twilight?



- A) Diurnal
- B) Nocturnal
- C) Matutinal
- D) Crepuscular
- E) Vespertine
- F)

32. (1.00 pts) Give the **common name** for the species shown in **picture E**. (Spelling must be correct to get credit.)




American Goldfinch

33. (1.00 pts) All birds are warm-blooded, even the species found in the Arctic.

- True
- False

34. (1.00 pts) Give the **common name** for the species shown in **picture F**. (Spelling must be correct to get credit.)



Peregrine Falcon


35. (1.00 pts) When the species shown in **picture F** is in a dive (technique called stooping), how fast can it go?



(Mark **ALL** correct answers)

- A) 50mph
- B) 80mph
- C) 180mph
- D) 240mph
- E) 300mph

36. (1.00 pts) Give the **common name** for the species shown in **picture A**. (Spelling must be correct to get credit.)




American Avocet

37. (1.00 pts) One of the defining characteristics of the class Aves is that they all can fly.


True False

38. (1.00 pts) Give the **common name** for the species shown in **picture B**. (Spelling must be correct to get credit.)




Black-necked Stilt

39. (1.00 pts) Give the **common name** for the species shown in **picture E**. (Spelling must be correct to get credit.)



Laysan Albatross


40. (1.00 pts) What is the wing span of the species shown in **picture E**?



- A) 20"
 B) 36"

- C) 42"
- D) 58"
- E) 60"
- F) 78"

41. (1.00 pts) Give the **common name** for the species shown in **picture A**. (Spelling must be correct to get credit.)



Black-capped Chickadee

Great Job!

Thanks.